

Daily Arithmetic - Week Beginning 18th May 2020

Monday

1) $853,648 + 89,587 =$

2) $6,398,647 + 875,463 =$

3) $76,015 - 32,748 =$

4) $483,208 - 94,372 =$

5) $347 \times 85 =$

6) $864 \times 78 =$

7) $2560 \div 8 =$

8) $696 \div 12 =$

9) $8345 = 8.345 \times \underline{\hspace{2cm}}$

10) $4.302 = \underline{\hspace{2cm}} \div 10$

Daily Arithmetic - Week Beginning 18th May 2020

Tuesday

1) Round 84,975

A) To the nearest 10 =

B) To the nearest 100 =

C) To the nearest 1000 =

D) To the nearest 10,000 =

2) What is the value of the underlined digits?

A) 7, 543,982

B) 8,473,986

C) 5,643,781.07

D) 9,412,803.7

3) Write this number in words: 103,304,008

4) Write this number using numerals: 5 hundred million, five hundred and twenty thousand, nine hundred and eighty.

5) Eight million, four hundred and seventy-two thousand, and four is written as

8,472,040. True or False?

Daily Arithmetic - Week Beginning 18th May 2020

Wednesday

1) Order these in ascending order:

52,867; 52,678; 25,876; 25,786; 26,587

2) Order these in descending order:

326,910; 326,019; 326,109; 326,091; 362,019

3) $794.2 + 98.07 =$

4) $382.04 + 697.6 =$

5) $487.6 - 92.8 =$

6) $568.09 - 283.87 =$

7) $64.008 \times 10 =$

8) $703.07 \times 100 =$

9) $45302 \div 100 =$

10) $80437 \div 1000 =$

Daily Arithmetic - Week Beginning 18th May 2020

Thursday

1) Find 23% of 600 =

2) Find 45% of 600 =

3) Find 68% of 600 =

4) Find 14% of 600 =

5) Find 97% of 600 =

6) $456 \times 43 =$

7) $764 \times 56 =$

8) $394 \times 234 =$

9) $540 \div 15 =$

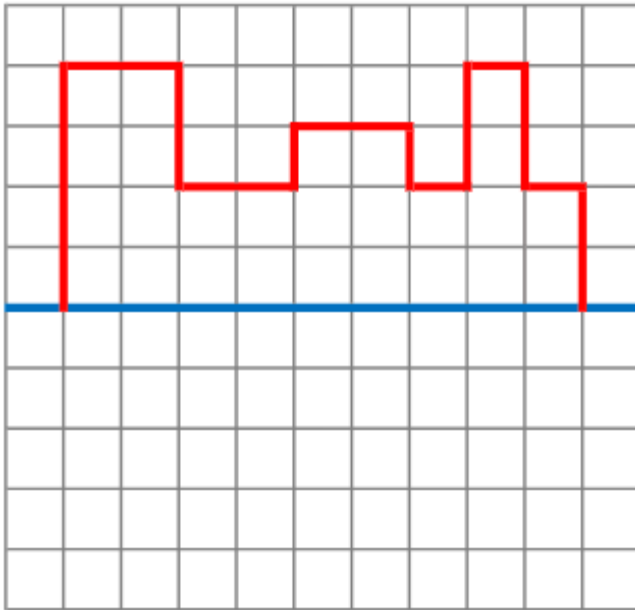
10) $1,496 \div 22 =$

Daily Arithmetic - Week Beginning 18th May 2020

Friday

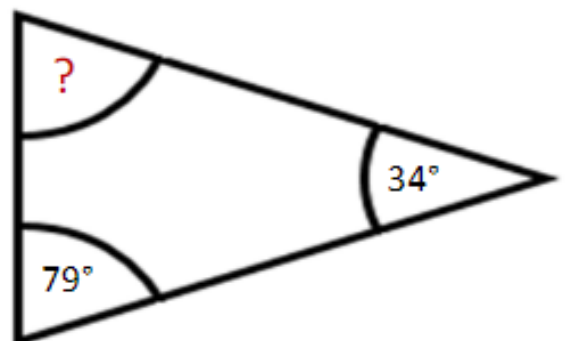
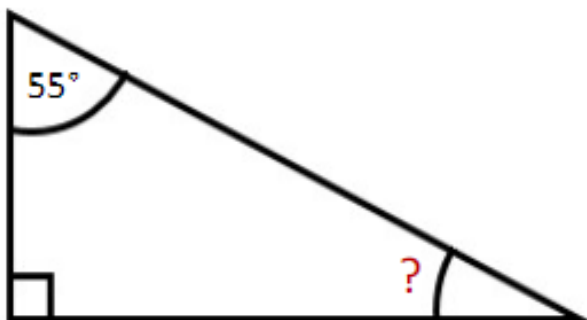
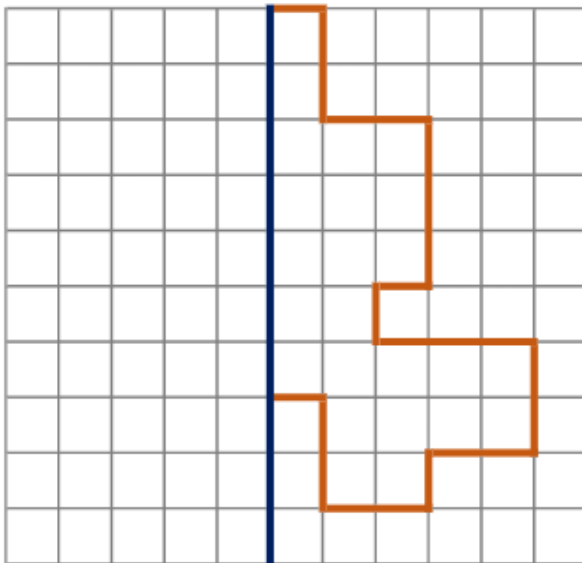
Reflect this shape through the **x-axis**.

1)



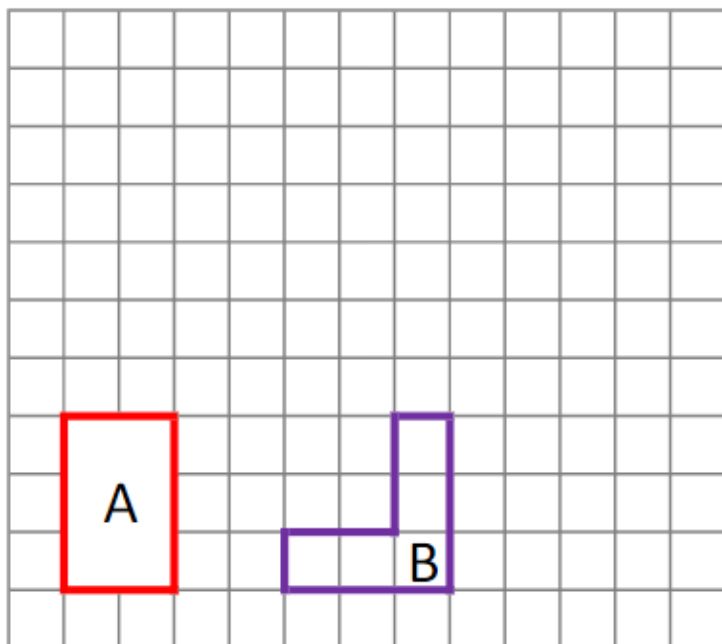
2)

Reflect the shape below through the **y-axis**.



Daily Arithmetic - Week Beginning 18th May 2020

Translate (move) each of the shapes below by **4 squares to the right** and **3 squares up**.



Translate each of the shapes below by **2 squares to the left** and **4 squares down**.

