




Write each time in words.



twenty minutes past 3





Write each time as an analogue time in words.
Draw the time onto a clock face.



ten minutes to 4




Write each in digital time.

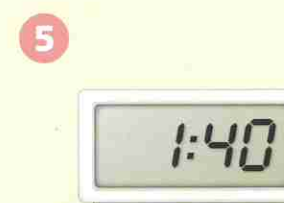
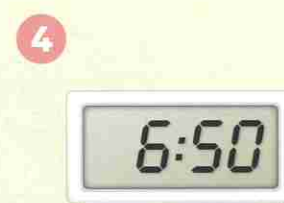


I am confident with telling the time to five minute intervals on analogue and digital clocks.



Write each time as a digital time.




Write each as an analogue time in words.



Write the time 10 minutes later in words.



Write the time 20 minutes later as a digital time.



I am confident with telling the time to five minute intervals on analogue and digital clocks.