





Telling the time and timing events

Write in words the time on each clock face.



quarter past 4




Write in words the time on each digital clock.



How many quarter past and quarter to times are there between 1 o'clock and 3 o'clock?

I am confident with reading the time to the nearest 5 minutes.

Write each time in words.



13 Write a time between 6 o'clock and 7 o'clock.

14 Write a time between ten minutes past 2 and a quarter past 2.

15 Write a time between twenty-five minutes past 8 and half past 8.

I am confident with reading the time to the nearest minute.

Write each time in words.

1



5



9



2



6



10



3



7



11



4



8



12



- 13 Write a time between a quarter past 3 and twenty minutes past 3.
- 14 Write a time between twenty-five minutes to 5 and twenty minutes to 5.
- 15 Write a time between ten minutes to 1 and five minutes to 1.



I am confident with reading the time to the nearest minute.

Write the number of seconds for keeping the football in the air.

1 1 minute



4 2 minutes 10 seconds



2 2 minutes

5 1 minute 15 seconds

3 1 minute 30 seconds

6 $3\frac{1}{3}$ minutes



Write the number of minutes and seconds for skipping.

80 seconds = 1 minute 20 seconds



9 120 seconds

12 72 seconds

7 90 seconds




10 150 seconds



13 130 seconds

8 100 seconds



11 85 seconds



14 145 seconds



You are sponsored 5p per skip. Estimate how many skips you can do in 1 minute. How much will you raise?

- 15 The first song on my CD plays for 3 minutes 1 second and the second song plays for 2 minutes 55 seconds. How long does it take to play both songs?



I am confident with the number of seconds in a minute.