

1

Here is a number sentence.

$$\boxed{?} + 27 > 85$$

Circle **all** the numbers below that make the number sentence correct.



30

40

50

60

70

1 mark

2

Arrangements

Here are some number cards:

1**7****3****5**

You can use each card once to make the number 1735, like this:

1	7	3	5
----------	----------	----------	----------

(a) What is the **biggest** number you can make with the four cards?



1 mark

(b) Explain why you **cannot** make an **even** number with the four cards.



1 mark

(c)

1	7	3	5
---	---	---	---

Use some of the four number cards to make numbers that are **as close as possible** to the numbers written below.

Examples

80 →

7	5
---	---

30 →

3	1
---	---

You must **not** use the same card more than once in each answer.

Handwritten mark

50 →

--	--

1 mark

Handwritten mark

60 →

--	--

1 mark

Handwritten mark

4000 →

--	--	--	--

1 mark

Handwritten mark

1500 →

--	--	--	--

1 mark

Handwritten mark

1600 →

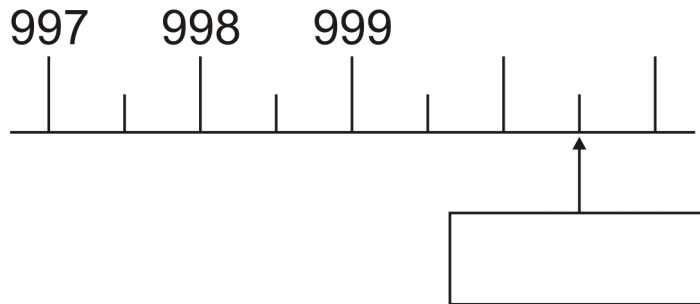
--	--	--	--

1 mark

3

Here is part of a number line.

Write the number shown by the arrow.



1 mark

4

Mr Jones looks at the prices of 5 mansions.

He wants to look at mansions costing between £990 000 and £1 110 000.

Mansion for sale		
	Name	Price
A	Avery House	£989 990
B	Beano Hall	£1 050 000
C	Chive Castle	£1 200 900
D	Denby House	£1 105 000
E	Eve Court	£991 500

Write the letters of the mansions that he looks at.

2 marks

5

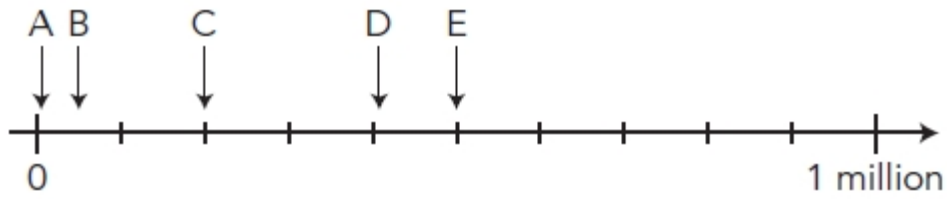
Circle two different numbers which **multiply** together to make **1 million**.




10 100 1000 10 000 100 000

1 mark

6



Write the letter of the arrow that points to the number 50 000



1 mark