


Telling the time

Write each time as an analogue time in words.



Draw hands on clock faces to show these times.


- | | |
|-------------------|------------------------|
| 10 Half past 6 | 13 Ten minutes past 2 |
| 11 Quarter to 8 | 14 Five minutes to 7 |
| 12 Quarter past 9 | 15 Twenty minutes to 4 |



The minute hand of a clock is pointing to 3. Write in words four different times it could be.

☐ I am confident with telling the time to the nearest 5 minutes.

Write the matching digital time.




Write am or pm beside each time.



Emily is doing an activity that you do every day. A time is showing on her watch. This time could be am or pm. Write what the time could be, and say what Emily could be doing. For example, she could be cleaning her teeth at 7:30.

☐ I am confident with telling the time and using am and pm.

Write the matching digital time.



Draw the matching clock-face time and write am or pm beside each digital time.



THINK It is 7:15. Write three things that you might be doing at 7:15 am or 7:15 pm.

☐ I am confident with telling the time and using am and pm.

Draw an analogue clock to show the time 10 minutes later than the following times.

- | | |
|---------|---------|
| 1 11:20 | 6 12:55 |
| 2 9:30 | 7 4:40 |
| 3 12:10 | 8 7:15 |
| 4 6:05 | 9 1:50 |
| 5 2:35 | 10 3:25 |

GRAB! Resource sheet of blank clock faces

Write the digital time when the activity ends.



THINK An activity takes 20 minutes and ends at half past 12. At what time did it start?

☐ I am confident with working out the time a number of minutes later than a given time.

Draw an analogue clock to show the time 20 minutes later.

GRAB!

Resource sheet of blank clock faces

1 4:15

5 12:30

9 11:55

2 6:20

6 2:50

10 1:45

3 7:40

7 8:10

11 9:55

4 3:05

8 5:45

12 12:00

Write the time after each activity is finished. Write am or pm.



It will take me 15 minutes to walk to school.

He will get to school at 8:45 am.

8:30


13



I will play this computer game for 20 minutes.

4:30

15



I will play in the park for 30 minutes.

3:45

14



It will take me 10 minutes to finish my breakfast.

7:30

16



I am going to swim for 50 minutes.

11:30

THINK

An activity takes 20 minutes and ends at quarter past 12. At what time did it start?

I am confident with working out the time a number of minutes later than a given time.